

Building a Hierarchy of Shapes

Grade 5 Math

Student Name: _____







Date: _____

In the video, you saw lots of polygons made from wood and clay around Old Salem. Let's take a closer look at shapes you may have seen.

Part 1: Identify the types of polygons represented by the pictures in the chart. Use these words:

Square, Rectangle, Rhombus, Parallelogram, Quadrilateral

HINT: Most of the pictures should have more than one polygon type written.

Shapes	Polygons represented by this shape (Remember to list ALL of the polygons that apply.)
	
	
	
	
	
	

Part 2: Use the words you wrote in your chart to help you answer the following questions.

1. What word did you write the most? _____

2. What word did you write the *second most*? _____

3. What word did you write the *least*? _____

Building a Hierarchy of Shapes, p.2

Grade 5 Math

Student Name: _____

Date: _____

Part 3: Build a hierarchy diagram of polygons by using your answers on the previous page.

